

**2011 - 2012 Log1 Contest Round 2
Theta Applications**

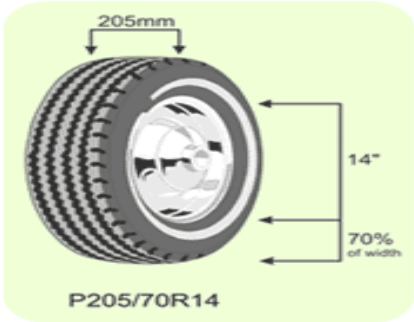
Name: _____

Units do not have to be included.

4 points each		
1	It takes Richard 70 minutes to drive from Bellingham to Seattle, but the drive from Seattle to Bellingham takes 110 minutes due to traffic. He takes the same 80 mile route both ways. What is his average speed, in miles per hour, for the roundtrip?	
2	A father is now four times as old as his son. Three years ago the father was six years more than three times the son's present age. What is the sum of the father and son's current ages?	
3	A speeding car is moving with a constant velocity of $v = 150$ ft/sec when it passes a stationary police car. Starting from rest, the police car accelerates at a rate of $a = 12$ ft/sec ² . At the moment the speeding car passes the police car, their positions are given by the equations $y(t) = 150t$ and $y(t) = 6t^2$, respectively. At what time t , in seconds, will the police car catch up to the speeding car?	
4	Tom and Rich want to get a stack of math exams graded as quickly as possible. Normally, Tom takes $\frac{3}{4}$ of an hour to grade a stack of 100 tests. Rich takes $1\frac{1}{2}$ hours to do the same stack. Together, how long will it take, in hours, to complete the entire stack of 100 tests?	
5	Washington state changed the license plates to a new format where there are three letters followed by four digits, but the digit 0 cannot be used next to a letter and the letter "O" cannot be used next to a digit. What is the sum of the digits in the number of distinct valid license plates?	

5 points each		
6	How many different ways can Bertha pay for a \$0.68 apple if she only has dimes, nickels, and pennies?	
7	Nancy and Sid travel the same route to work. Nancy travels at a constant rate while Sid rushes to work at a speed 5 miles per hour faster than Nancy. Sid trudges home 5 miles per hour slower than Nancy. Sid's average rate is 1 mile per hour slower than Nancy's. What is Sid's average rate, in miles per hour?	
8	Trung drops a ball off the top of a building 192 feet high. After each bounce, the ball rebounds to a height exactly one-fourth of the previous drop height. If this were to continue bouncing forever, what would be the total distance, in feet, the ball travels?	
9	A hose sustaining a water flow at $1\text{ cm}^3/\text{sec}$ is used to fill an initially empty inverted cone of radius 5 cm and height 5 cm. The cone drains at a rate of $\frac{1}{4}\text{ cm}^3/\text{sec}$. How long, in seconds, will it take before the cone overflows at the top?	
10	Mr. Boguslawski is building a water tower in the shape of a torus with a volume of 1500 m^3 . The cross-sectional radius of the torus is 5 m. If sheet metal costs \$7 per square meter, what is the least amount of money he can spend on his water tower?	

6 points each

11	<p>Money that Elisa deposits into a savings account this year will accrue interest, leaving her with $1+r$ dollars for each dollar that she saved. Elisa plans to work all of this year, and take the following year off, using just her savings from this year plus interest to spend for her off year. In terms of r, what fraction of her first year earnings must Elisa save so that she will have an amount to spend during her off year equal to one-half of the amount that she spent during her work year?</p>	
12	<p>The decibel scale is a logarithmic scale that describes relative loudness (intensity) of a sound compared to the threshold of hearing. It is given by the equation $dB = 10 \log \left(\frac{I}{I_0} \right)$ where I = intensity of the sound source. The threshold of hearing is $I_0 = 1$ in arbitrary units. Your friend screams at 40 dB. How many ADDITIONAL decibels above your friend would you have to scream in order to have a voice that is twice the intensity, I, as your friend? Leave your final answer in log form.</p>	
13	<p>Your car uses a standard P205 – 70R14 tire. The numbers are defined as follows: 205 is the width of the tire in millimeters. The 14 is the inner diameter of the tire in inches. The 70 is the “height” of the tire, the aspect ratio expressed as a percentage of the tire’s width. Calculate the total diameter of the tire, in millimeters, based on this information. 25.4 mm = 1 inch.</p>	 <p style="text-align: center;">P205/70R14</p>
14	<p>A mysterious radioactive substance has a half-life of approximately 1 day and decays according to the exponential equation $N = N_0 e^{-t \ln 2}$, where N_0 is the original amount of the substance and N is the amount that remains after t days. If you begin with a 5000 g sample, how many days will have passed such that only 2000 g of your sample remains? You may leave your answer in natural log form.</p>	
15	<p>You are standing at the top of a cliff that is 43 feet above sea level and you throw a rock with an upward vertical velocity of 32 feet/second. At what time, in seconds, will the rock attain a height above sea level of 10 feet? The height of the rock is modeled by the equation $y = 43 + 32t - 16t^2$.</p>	

2011 - 2012 Log1 Contest Round 2
Alpha Applications

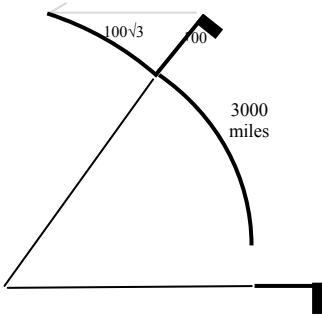
Name: _____

Units do not have to be included.

4 points each		
1	It takes Richard 70 minutes to drive from Bellingham to Seattle, but the drive from Seattle to Bellingham takes 110 minutes due to traffic. He takes the same 80 mile route both ways. What is his average speed, in miles per hour, for the roundtrip?	
2	A father is now four times as old as his son. Three years ago the father was six years more than three times the son's present age. What is the sum of the father and son's current ages?	
3	A speeding car is moving with a constant velocity of $v = 150$ ft/sec when it passes a stationary police car. Starting from rest, the police car accelerates at a rate of $a = 12$ ft/sec ² . At the moment the speeding car passes the police car, their positions are given by the equations $y(t) = 150t$ and $y(t) = 6t^2$, respectively. At what time t , in seconds, will the police car catch up to the speeding car?	
4	Tom and Rich want to get a stack of math exams graded as quickly as possible. Normally, Tom takes $\frac{3}{4}$ of an hour to grade a stack of 100 tests. Rich takes $1\frac{1}{2}$ hours to do the same stack. Together, how long will it take, in hours, to complete the entire stack of 100 tests?	
5	Washington state changed the license plates to a new format where there are three letters followed by four digits, but the digit 0 cannot be used next to a letter and the letter "O" cannot be used next to a digit. What is the sum of the digits in the number of distinct valid license plates?	

5 points each		
6	How many different ways can Bertha pay for a \$0.68 apple if she only has dimes, nickels, and pennies?	
7	Nancy and Sid travel the same route to work. Nancy travels at a constant rate while Sid rushes to work at a speed 5 miles per hour faster than Nancy. Sid trudges home 5 miles per hour slower than Nancy. Sid's average rate is 1 mile per hour slower than Nancy's. What is Sid's average rate, in miles per hour?	
8	Trung drops a ball off the top of a building 192 feet high. After each bounce, the ball rebounds to a height exactly one-fourth of the previous drop height. If this were to continue bouncing forever, what would be the total distance, in feet, the ball travels?	
9	A hose sustaining a water flow at $1\text{ cm}^3/\text{sec}$ is used to fill an initially empty inverted cone of radius 5 cm and height 5 cm. The cone drains at a rate of $\frac{1}{4}\text{ cm}^3/\text{sec}$. How long, in seconds, will it take before the cone overflows at the top?	
10	Mr. Boguslawski is building a water tower in the shape of a torus with a volume of 1500 m^3 . The cross-sectional radius of the torus is 5 m. If sheet metal costs \$7 per square meter, what is the least amount of money he can spend on his water tower?	

6 points each

11	<p>Money that Elisa deposits into a savings account this year will accrue interest, leaving her with $1+r$ dollars for each dollar that she saved. Elisa plans to work all of this year, and take the following year off, using just her savings from this year plus interest to spend for her off year. In terms of r, what fraction of her first year earnings must Elisa save so that she will have an amount to spend during her off year equal to one-half of the amount that she spent during her work year?</p>	
12	<p>An ocean liner heads directly north in idle waters with a speed of 25 knots when it suddenly encounters a 10 knot ocean current directed at 30° North of East. Due to the northeasterly directed current, what is the resultant speed of the ocean liner, in knots, relative to the Earth?</p>	
13	<p>You are a visiting an Earth-like planet and wish to determine its circumference. You stand in an abandoned city at the planet's equator where there is a 100ft flagpole. The planet's sun does not cast a shadow since it is directly overhead. You head directly north for 3000 miles and discover another abandoned city with an identical 100ft flagpole that casts an approximately linear shadow equal to $100\sqrt{3}ft$ when viewed at exactly the same time as the flagpole at the equator. Assuming that the star's light rays are parallel, what is the circumference of the planet, in miles? You may assume that the flagpole and its shadow form a right triangle as shown in the diagram above.</p>	
14	<p>Trung and Stacey are trying to meet up at a coffee house to study math. However, they each arrive randomly somewhere between 11 am and 2 pm. Upon their respective arrival times; Trung will wait for 10 minutes and Stacey will wait for an hour. What is the probability that they will actually meet each other?</p>	
15	<p>Four expectant grandparents all possess brown eyes and the recessive gene for blue eyes. The blue-eyed gene passes from parents at a likelihood of 50%, but a child will only have blue eyes if both parents pass on the recessive gene. If the parents (children of the above grandparents) both have brown eyes, what is the likelihood of their child having blue eyes?</p>	

2011 - 2012 Log1 Contest Round 2
Mu Applications

Name: _____

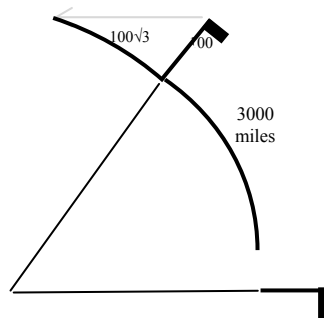
Units do not have to be included.

4 points each		
1	It takes Richard 70 minutes to drive from Bellingham to Seattle, but the drive from Seattle to Bellingham takes 110 minutes due to traffic. He takes the same 80 mile route both ways. What is his average speed, in miles per hour, for the roundtrip?	
2	A father is now four times as old as his son. Three years ago the father was six years more than three times the son's present age. What is the sum of the father and son's current ages?	
3	Tom and Rich want to get a stack of math exams graded as quickly as possible. Normally, Tom takes $\frac{3}{4}$ of an hour to grade a stack of 100 tests. Rich takes $1\frac{1}{2}$ hours to do the same stack. Together, how long will it take, in hours, to complete the entire stack of 100 tests?	
4	How many different ways can Bertha pay for a \$0.68 apple if she only has dimes, nickels, and pennies?	
5	Nancy and Sid travel the same route to work. Nancy travels at a constant rate while Sid rushes to work at a speed 5 miles per hour faster than Nancy. Sid trudges home 5 miles per hour slower than Nancy. Sid's average rate is 1 mile per hour slower than Nancy's. What is Sid's average rate, in miles per hour?	

5 points each		
6	Trung drops a ball off the top of a building 192 feet high. After each bounce, the ball rebounds to a height exactly one-fourth of the previous drop height. If this were to continue bouncing forever, what would be the total distance, in feet, the ball travels?	
7	A hose sustaining a water flow at $1\text{ cm}^3/\text{sec}$ is used to fill an initially empty inverted cone of radius 5 cm and height 5 cm. The cone drains at a rate of $\frac{1}{4}\text{ cm}^3/\text{sec}$. How long, in seconds, will it take before the cone overflows at the top?	
8	Mr. Boguslawski is building a water tower in the shape of a torus with a volume of 1500 m^3 . The cross-sectional radius of the torus is 5 m. If sheet metal costs \$7 per square meter, what is the least amount of money he can spend on his water tower?	
9	Money that Elisa deposits into a savings account this year will accrue interest, leaving her with $1+r$ dollars for each dollar that she saved. Elisa plans to work all of this year, and take the following year off, using just her savings from this year plus interest to spend for her off year. In terms of r , what fraction of her first year earnings must Elisa save so that she will have an amount to spend during her off year equal to one-half of the amount that she spent during her work year?	
10	An ocean liner heads directly north in idle waters with a speed of 25 knots when it suddenly encounters a 10 knot ocean current directed at 30° North of East. Due to the northeasterly directed current, what is the resultant speed of the ocean liner, in knots, relative to the Earth?	

6 points each

11 You are a visiting an Earth-like planet and wish to determine its circumference. You stand in an abandoned city at the planet's equator where there is a 100ft flagpole. The planet's sun does not cast a shadow since it is directly overhead. You head directly north for 3000 miles and discover another abandoned city with an identical 100ft flagpole that casts an **approximately linear shadow** equal to $100\sqrt{3}ft$ when viewed at exactly the same time as the flagpole at the equator. Assuming that the star's light rays are parallel, what is the circumference of the planet, in miles? You may assume that the flagpole and its shadow form a right triangle as shown in the diagram above.



12 Four expectant grandparents all possess brown eyes and the recessive gene for blue eyes. The blue-eyed gene passes from parents at a likelihood of 50%, but a child will only have blue eyes if both parents pass on the recessive gene. If the parents (children of the above grandparents) both have brown eyes, what is the likelihood of their child having blue eyes?

13 A toy plane is flying in a horizontal circular spiral pattern with initial radius 5 m, making one full revolution each second. The plane decreases its radius of motion 1 m every revolution. What total distance, in meters, has it flown after 5 revolutions on the spiral path?

14 Stacey is trying to retrieve her mischievous cat, Lotus, from the roof of her house. She leans a 24 feet long ladder against a wall and the foot of the ladder is sliding away at a constant rate of 3 ft/sec. Meanwhile, Stacey is climbing up the ladder at a rate of 2 ft/sec, When Stacey has climbed up the ladder 6 feet it makes an angle of $\frac{\pi}{3}$ radians with the ground. At that time, what rate is the height of the ladder changing, in ft/sec?

15 Stacey likes to cuddle with her cat, Lotus, at night. But Lotus is more active at night so the probability that Lotus will want to cuddle with Stacey on any given night is 40%. What is the probability that Lotus will cuddle with Stacey for at least two out of five nights? Express the probability of a decimal rounded to the nearest hundredth.

**2011 - 2012 Log1 Contest Round 2
Theta Applications**

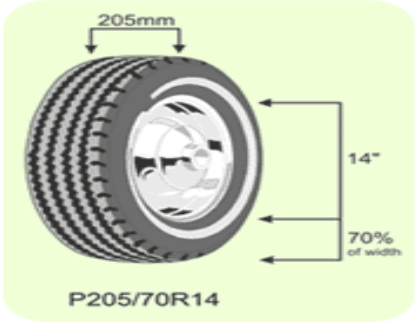
Name: _____

Units do not have to be included.

4 points each		
1	It takes Richard 70 minutes to drive from Bellingham to Seattle, but the drive from Seattle to Bellingham takes 110 minutes due to traffic. He takes the same 80 mile route both ways. What is his average speed, in miles per hour, for the roundtrip?	$\frac{160}{3}$ [mph]
2	A father is now four times as old as his son. Three years ago the father was six years more than three times the son's present age. What is the sum of the father and son's current ages?	45
3	A speeding car is moving with a constant velocity of $v = 150$ ft/sec when it passes a stationary police car. Starting from rest, the police car accelerates at a rate of $a = 12$ ft/sec ² . At the moment the speeding car passes the police car, their positions are given by the equations $y(t) = 150t$ and $y(t) = 6t^2$, respectively. At what time t , in seconds, will the police car catch up to the speeding car?	25 [seconds]
4	Tom and Rich want to get a stack of math exams graded as quickly as possible. Normally, Tom takes $\frac{3}{4}$ of an hour to grade a stack of 100 tests. Rich takes $1\frac{1}{2}$ hours to do the same stack. Together, how long will it take, in hours, to complete the entire stack of 100 tests?	$\frac{1}{2}$ [hours]
5	Washington state changed the license plates to a new format where there are three letters followed by four digits, but the digit 0 cannot be used next to a letter and the letter "O" cannot be used next to a digit. What is the sum of the digits in the number of distinct valid license plates?	9

5 points each		
6	How many different ways can Bertha pay for a \$0.68 apple if she only has dimes, nickels, and pennies?	56
7	Nancy and Sid travel the same route to work. Nancy travels at a constant rate while Sid rushes to work at a speed 5 miles per hour faster than Nancy. Sid trudges home 5 miles per hour slower than Nancy. Sid's average rate is 1 mile per hour slower than Nancy's. What is Sid's average rate, in miles per hour?	24 [mph]
8	Trung drops a ball off the top of a building 192 feet high. After each bounce, the ball rebounds to a height exactly one-fourth of the previous drop height. If this were to continue bouncing forever, what would be the total distance, in feet, the ball travels?	320 [feet]
9	A hose sustaining a water flow at $1 \text{ cm}^3/\text{sec}$ is used to fill an initially empty inverted cone of radius 5 cm and height 5 cm. The cone drains at a rate of $\frac{1}{4} \text{ cm}^3/\text{sec}$. How long, in seconds, will it take before the cone overflows at the top?	$\frac{500\pi}{9}$ [seconds]
10	Mr. Boguslawski is building a water tower in the shape of a torus with a volume of 1500 m^3 . The cross-sectional radius of the torus is 5 m. If sheet metal costs \$7 per square meter, what is the least amount of money he can spend on his water tower?	\$4,200

6 points each

11	<p>Money that Elisa deposits into a savings account this year will accrue interest, leaving her with $1+r$ dollars for each dollar that she saved. Elisa plans to work all of this year, and take the following year off, using just her savings from this year plus interest to spend for her off year. In terms of r, what fraction of her first year earnings must Elisa save so that she will have an amount to spend during her off year equal to one-half of the amount that she spent during her work year?</p>	$\frac{1}{3 + 2r}$	
12	<p>The decibel scale is a logarithmic scale that describes relative loudness (intensity) of a sound compared to the threshold of hearing. It is given by the equation $dB = 10 \log \left(\frac{I}{I_0} \right)$ where I = intensity of the sound source. The threshold of hearing is $I_0 = 1$ in arbitrary units. Your friend screams at 40 dB. How many ADDITIONAL decibels above your friend would you have to scream in order to have a voice that is twice the intensity, I, as your friend? Leave your final answer in log form.</p>	$10 \log 2$	
13	<p>Your car uses a standard P205 – 70R14 tire. The numbers are defined as follows: 205 is the width of the tire in millimeters. The 14 is the inner diameter of the tire in inches. The 70 is the “height” of the tire, the aspect ratio expressed as a percentage of the tire’s width. Calculate the total diameter of the tire, in millimeters, based on this information. 25.4 mm = 1 inch.</p>	 <p style="text-align: center;">P205/70R14</p>	642.6 [mm]
14	<p>A mysterious radioactive substance has a half-life of approximately 1 day and decays according to the exponential equation $N = N_0 e^{-t \ln 2}$, where N_0 is the original amount of the substance and N is the amount that remains after t days. If you begin with a 5000 g sample, how many days will have passed such that only 2000 g of your sample remains? You may leave your answer in natural log form.</p>	$\log_2 5 - 1$ Or $\frac{\ln 5}{\ln 2} - 1$	
15	<p>You are standing at the top of a cliff that is 43 feet above sea level and you throw a rock with an upward vertical velocity of 32 feet/second. At what time, in seconds, will the rock attain a height above sea level of 10 feet? The height of the rock is modeled by the equation $y = 43 + 32t - 16t^2$.</p>	$\frac{11}{4} \text{ [seconds]}$	

2011 – 2012 Log1 Contest Round 2
Alpha Applications

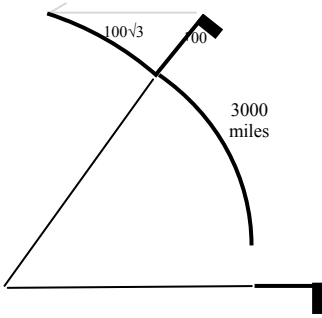
Name: _____

Units do not have to be included.

4 points each		
1	It takes Richard 70 minutes to drive from Bellingham to Seattle, but the drive from Seattle to Bellingham takes 110 minutes due to traffic. He takes the same 80 mile route both ways. What is his average speed, in miles per hour, for the roundtrip?	$\frac{160}{3}$ [mph]
2	A father is now four times as old as his son. Three years ago the father was six years more than three times the son's present age. What is the sum of the father and son's current ages?	45
3	A speeding car is moving with a constant velocity of $v = 150$ ft/sec when it passes a stationary police car. Starting from rest, the police car accelerates at a rate of $a = 12$ ft/sec ² . At the moment the speeding car passes the police car, their positions are given by the equations $y(t) = 150t$ and $y(t) = 6t^2$, respectively. At what time t , in seconds, will the police car catch up to the speeding car?	25 [seconds]
4	Tom and Rich want to get a stack of math exams graded as quickly as possible. Normally, Tom takes $\frac{3}{4}$ of an hour to grade a stack of 100 tests. Rich takes $1\frac{1}{2}$ hours to do the same stack. Together, how long will it take, in hours, to complete the entire stack of 100 tests?	$\frac{1}{2}$ [hours]
5	Washington state changed the license plates to a new format where there are three letters followed by four digits, but the digit 0 cannot be used next to a letter and the letter "O" cannot be used next to a digit. What is the sum of the digits in the number of distinct valid license plates?	9

5 points each		
6	How many different ways can Bertha pay for a \$0.68 apple if she only has dimes, nickels, and pennies?	56
7	Nancy and Sid travel the same route to work. Nancy travels at a constant rate while Sid rushes to work at a speed 5 miles per hour faster than Nancy. Sid trudges home 5 miles per hour slower than Nancy. Sid's average rate is 1 mile per hour slower than Nancy's. What is Sid's average rate, in miles per hour?	24 [mph]
8	Trung drops a ball off the top of a building 192 feet high. After each bounce, the ball rebounds to a height exactly one-fourth of the previous drop height. If this were to continue bouncing forever, what would be the total distance, in feet, the ball travels?	320 [feet]
9	A hose sustaining a water flow at $1 \text{ cm}^3/\text{sec}$ is used to fill an initially empty inverted cone of radius 5 cm and height 5 cm. The cone drains at a rate of $\frac{1}{4} \text{ cm}^3/\text{sec}$. How long, in seconds, will it take before the cone overflows at the top?	$\frac{500\pi}{9}$ [seconds]
10	Mr. Boguslawski is building a water tower in the shape of a torus with a volume of 1500 m^3 . The cross-sectional radius of the torus is 5 m. If sheet metal costs \$7 per square meter, what is the least amount of money he can spend on his water tower?	\$4,200

6 points each

11	<p>Money that Elisa deposits into a savings account this year will accrue interest, leaving her with $1+r$ dollars for each dollar that she saved. Elisa plans to work all of this year, and take the following year off, using just her savings from this year plus interest to spend for her off year. In terms of r, what fraction of her first year earnings must Elisa save so that she will have an amount to spend during her off year equal to one-half of the amount that she spent during her work year?</p>	$\frac{1}{3 + 2r}$	
12	<p>An ocean liner heads directly north in idle waters with a speed of 25 knots when it suddenly encounters a 10 knot ocean current directed at 30° North of East. Due to the northeasterly directed current, what is the resultant speed of the ocean liner, in knots, relative to the Earth?</p>	$5\sqrt{39}$ [knots]	
13	<p>You are visiting an Earth-like planet and wish to determine its circumference. You stand in an abandoned city at the planet's equator where there is a 100ft flagpole. The planet's sun does not cast a shadow since it is directly overhead. You head directly north for 3000 miles and discover another abandoned city with an identical 100ft flagpole that casts an approximately linear shadow equal to $100\sqrt{3}ft$ when viewed at exactly the same time as the flagpole at the equator. Assuming that the star's light rays are parallel, what is the circumference of the planet, in miles? You may assume that the flagpole and its shadow form a right triangle as shown in the diagram above.</p>		$18,000$ [miles]
14	<p>Trung and Stacey are trying to meet up at a coffee house to study math. However, they each arrive randomly somewhere between 11 am and 2 pm. Upon their respective arrival times; Trung will wait for 10 minutes and Stacey will wait for an hour. What is the probability that they will actually meet each other?</p>	$\frac{215}{648}$	
15	<p>Four expectant grandparents all possess brown eyes and the recessive gene for blue eyes. The blue-eyed gene passes from parents at a likelihood of 50%, but a child will only have blue eyes if both parents pass on the recessive gene. If the parents (children of the above grandparents) both have brown eyes, what is the likelihood of their child having blue eyes?</p>	$\frac{1}{9}$	

2011 – 2012 Log1 Contest Round 2
Mu Applications

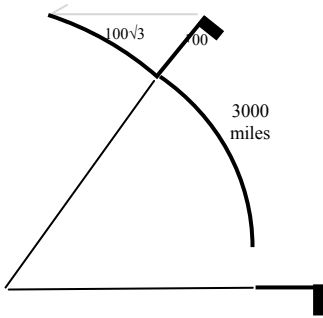
Name: _____

Units do not have to be included.

4 points each		
1	It takes Richard 70 minutes to drive from Bellingham to Seattle, but the drive from Seattle to Bellingham takes 110 minutes due to traffic. He takes the same 80 mile route both ways. What is his average speed, in miles per hour, for the roundtrip?	$\frac{160}{3}$ [mph]
2	A father is now four times as old as his son. Three years ago the father was six years more than three times the son's present age. What is the sum of the father and son's current ages?	45
3	Tom and Rich want to get a stack of math exams graded as quickly as possible. Normally, Tom takes $\frac{3}{4}$ of an hour to grade a stack of 100 tests. Rich takes 1 $\frac{1}{2}$ hours to do the same stack. Together, how long will it take, in hours, to complete the entire stack of 100 tests?	$\frac{1}{2}$ [hours]
4	How many different ways can Bertha pay for a \$0.68 apple if she only has dimes, nickels, and pennies?	56
5	Nancy and Sid travel the same route to work. Nancy travels at a constant rate while Sid rushes to work at a speed 5 miles per hour faster than Nancy. Sid trudges home 5 miles per hour slower than Nancy. Sid's average rate is 1 mile per hour slower than Nancy's. What is Sid's average rate, in miles per hour?	24 [mph]

5 points each		
6	Trung drops a ball off the top of a building 192 feet high. After each bounce, the ball rebounds to a height exactly one-fourth of the previous drop height. If this were to continue bouncing forever, what would be the total distance, in feet, the ball travels?	320 [feet]
7	A hose sustaining a water flow at 1 cm ³ /sec is used to fill an initially empty inverted cone of radius 5 cm and height 5 cm. The cone drains at a rate of $\frac{1}{4}$ cm ³ /sec. How long, in seconds, will it take before the cone overflows at the top?	$\frac{500\pi}{9}$ [seconds]
8	Mr. Boguslawski is building a water tower in the shape of a torus with a volume of 1500 m ³ . The cross-sectional radius of the torus is 5 m. If sheet metal costs \$7 per square meter, what is the least amount of money he can spend on his water tower?	\$4,200
9	Money that Elisa deposits into a savings account this year will accrue interest, leaving her with 1+r dollars for each dollar that she saved. Elisa plans to work all of this year, and take the following year off, using just her savings from this year plus interest to spend for her off year. In terms of r, what fraction of her first year earnings must Elisa save so that she will have an amount to spend during her off year equal to one-half of the amount that she spent during her work year?	$\frac{1}{3 + 2r}$
10	An ocean liner heads directly north in idle waters with a speed of 25 knots when it suddenly encounters a 10 knot ocean current directed at 30° North of East. Due to the northeasterly directed current, what is the resultant speed of the ocean liner, in knots, relative to the Earth?	$5\sqrt{39}$ [knots]

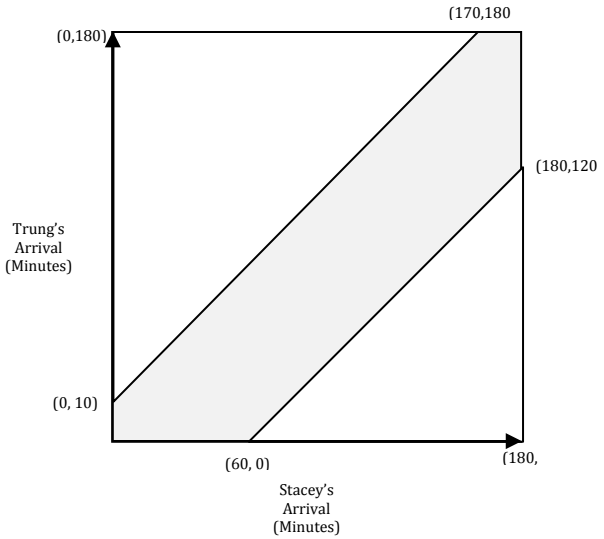
6 points each

11	<p>You are visiting an Earth-like planet and wish to determine its circumference. You stand in an abandoned city at the planet's equator where there is a 100ft flagpole. The planet's sun does not cast a shadow since it is directly overhead. You head directly north for 3000 miles and discover another abandoned city with an identical 100ft flagpole that casts an approximately linear shadow equal to $100\sqrt{3}ft$ when viewed at exactly the same time as the flagpole at the equator. Assuming that the star's light rays are parallel, what is the circumference of the planet, in miles? You may assume that the flagpole and its shadow form a right triangle as shown in the diagram above.</p>	 <p>18,000 [miles]</p>
12	<p>Four expectant grandparents all possess brown eyes and the recessive gene for blue eyes. The blue-eyed gene passes from parents at a likelihood of 50%, but a child will only have blue eyes if both parents pass on the recessive gene. If the parents (children of the above grandparents) both have brown eyes, what is the likelihood of their child having blue eyes?</p>	$\frac{1}{9}$
13	<p>A toy plane is flying in a horizontal circular spiral pattern with initial radius 5 m, making one full revolution each second. The plane decreases its radius of motion 1 m every revolution. What total distance, in meters, has it flown after 5 revolutions on the spiral path?</p>	$25\pi[m]$
14	<p>Stacey is trying to retrieve her mischievous cat, Lotus, from the roof of her house. She leans a 24 feet long ladder against a wall and the foot of the ladder is sliding away at a constant rate of 3 ft/sec. Meanwhile, Stacey is climbing up the ladder at a rate of 2 ft/sec. When Stacey has climbed up the ladder 6 feet it makes an angle of $\frac{\pi}{3}$ radians with the ground. At that time, what rate is the height of the ladder changing, in ft/sec?</p>	$-\sqrt{3}$ [ft/sec]
15	<p>Stacey likes to cuddle with her cat, Lotus, at night. But Lotus is more active at night so the probability that Lotus will want to cuddle with Stacey on any given night is 40%. What is the probability that Lotus will cuddle with Stacey for at least two out of five nights? Express the probability of a decimal rounded to the nearest hundredth.</p>	0.66

**2011 - 2012 Log1 Contest Round 2
Applications Solutions**

Mu	Al	Th	Solution
1	1	1	<p>Average Speed = Total Distance / Total Time</p> <p>$160 / 180 = \mathbf{160/3}$ with optional units of [miles / hours, mph, etc.]</p> <p>Alternatively, take the harmonic mean of the two average velocities. $V_{ave} = \frac{2}{\frac{1}{80} + \frac{1}{80}} =$</p> $\frac{160 \text{ miles}}{180 \text{ minutes}} = \frac{160 \text{ miles}}{3 \text{ hours}}$
2	2	2	<p>Let F = father's present age and S = son's present age. $F = 4S$ and $F - 3 = 3S + 6$ or $F = 3S + 9$. Subtracting the two equations for F, $0 = -S + 9$ or $S = 9$. Since $F = 4S$, $F = 36$. Therefore, F + S = 45.</p>
	3	3	<p>The speeding car and police car will meet when their distances traveled are equal. Therefore, $150t = 6t^2$. Solving for t, $6t(t - 25) = 0$ or $t = 25$ seconds.</p>
3	4	4	<p>Let the work done for grading 100 tests be arbitrarily set at 1. The rate at which Tom does the work of grading 100 tests is $\frac{4}{3}$. Rich's rate of doing the same work is $\frac{2}{3}$. The amount of work Tom and Rich do in time, t, is $\frac{4}{3}t$ and $\frac{2}{3}t$, respectively. The total work is $1 = \frac{4}{3}t + \frac{2}{3}t$. $t = \frac{1}{2}$ hour.</p>
	5	5	<p>The number of distinct arrangements is $26 \times 26 \times 25 \times 9 \times 10 \times 10 \times 10 = 152,100,000$. Adding up all the digits, $1+5+2+1+0+0+0+0+0 = 9$</p>
4	6	6	<p>Let the ordered triple (d,n,p) represent the combination of dimes, nickels and pennies that add up to \$0.68. For d=6, the possibilities are (6,1,3) and (6,0,8). Taking away 1 dime requires that you replace it with either 1 nickel and 5 pennies or 10 pennies. Thus each additional dime taken away increases the possible combinations by 2. The pattern down to 0 dimes is $C = 2+4+6+8+10+12+14 = 56$</p>
5	7	7	<p>Let V_N = Nancy's average speed and let V_S = Sid's average speed. Sid's average speed may be determined from the harmonic mean of his going average ($V_N - 5$) and coming average ($V_N + 5$) speeds. $V_{Sid} = \frac{2}{\frac{1}{V_N - 5} + \frac{1}{V_N + 5}} = V_N - 1$. Rearranging, $V_N - 1 = \frac{2(V_N^2 - 25)}{2(V_N)}$</p> <p>$\rightarrow V_N^2 - V_N = V_N^2 - 25$. Thus, $V_N = 25$ and $V_S = 24$</p>
6	8	8	<p>The ball travels 192 ft for the first drop. The first rebound travels a roundtrip of 2×48 ft. The infinite series is $192 + 2 \cdot 192(1/4)^1 + 2 \cdot 192(1/4)^2 + \dots$. Equivalently, $H = 192 - 384 \left(\frac{1}{4}\right)^0 + \sum_0^\infty 384 \left(\frac{1}{4}\right)^n = -192 + \frac{384}{1 - \frac{1}{4}} = 320$ with optional units of [feet].</p>
7	9	9	<p>Volume of the cone = $\frac{1}{3} \pi r^2 h = 125\pi/3 \text{ cm}^3$. The net flow is $\frac{3}{4} \text{ cm}^3/\text{sec}$. Total time is $T = 125\pi/3 \text{ cm}^3 / (\frac{3}{4} \text{ cm}^3/\text{sec}) = 500 \pi/9$ seconds.</p>
8	10	10	<p>A torus is equivalent to a circular cylinder bent so that its ends are attached. Given that the volume of the torus is 1500 m^3, we can find the height of the equivalent cylinder with radius = 5m. $1500 = \pi 5^2 h$. $h = \frac{60}{\pi}$. The surface area of the torus is also equivalent to the lateral surface area of the circular cylinder. Thus $A = 2\pi r h = 2\pi 5 \frac{60}{\pi} = 600 \text{ m}^2$. Thus the minimum cost to build the tower with sheet metal is \$4,200</p>

9	11	11	<p>Let E_1 = Elisa's earnings in her first year of working. Let S = Elisa's savings from her first year of working. We wish to solve for S/E_1. If E_2 = the amount that Elisa has to spend during the second year, then $E_2 = S(1+r)$. However, E_2 = half of what Elisa spent during the first year = $\frac{1}{2}(E_1 - S)$. Thus, $\frac{1}{2}(E_1 - S) = S(1+r)$. Rearranging yields,</p> $\frac{E_1 - S}{S} = \frac{E_1}{S} - 1 = 2(1+r) \rightarrow \frac{E_1}{S} = 3 + 2r \rightarrow \frac{S}{E_1} = \frac{1}{3+2r}$
		12	<p>Setting $I_0 = 1$ the decibel equation yields $40 = 10 \log(I)$. For a sound that is twice the original intensity, $dB = 10 \log(2I) = 10 \log 2 + 10 \log(I) = 10 \log 2 + 40$; the amount above 40 is then $10 \log 2$.</p>
		13	<p>Twice the height of the tire must be added to the inner diameter to get the overall diameter of the tire. The height is $205 \times 0.70 = 143.5$ mm. Twice the height is 287 mm. The inner diameter is $14 \text{ in} \times 25.4 \text{ mm/in} = 355.6$ mm.</p> <p>Overall diameter = 642.6 with optional units of [mm]</p>
		14	<p>Solve for t. $2000 = 5000(2^{-t}) \rightarrow \frac{2}{5} = 2^{-t} \rightarrow \log_2\left(\frac{2}{5}\right) = -t \rightarrow t = \log_2 5 - 1$.</p> <p>Alternatively, using the definition of radioactive decay:</p> <p>Solve for t. $2000 = 5000e^{-t \ln 2} \rightarrow \frac{2}{5} = e^{-t \ln 2} \rightarrow \ln\left(\frac{2}{5}\right) = -t \ln 2 \rightarrow -\frac{\ln\left(\frac{2}{5}\right)}{\ln 2} = t \rightarrow -\left(\frac{\ln 2 - \ln 5}{\ln 2}\right) = t \rightarrow t = \frac{\ln 5}{\ln 2} - 1$</p> <p>Both answers are acceptable, albeit equivalent.</p>
		15	<p>Solve for t. $10 = 43 + 32t - 16t^2 \rightarrow 0 = 33 + 32t - 16t^2 \rightarrow 0 = 16t^2 - 32t - 33 \rightarrow 0 = (4t + 3)(4t - 11)$</p> <p>$t = \left(-\frac{3}{4}, \frac{11}{4}\right)$. Only $t = 11/4$ is a viable answer.</p>
10	12		<p>The speeds, when directed as vectors, of the ocean liner and ocean current add like vectors. Using the tip-to-toe method, the Law of Cosines may be used to find the resultant. The angle between the two vectors is 120. Therefore, $c^2 = a^2 + b^2 - 2ab \cos C = 25^2 + 10^2 - 2(25)(10)\cos 120^\circ = 625 + 100 - 500\left(-\frac{1}{2}\right) = 725 + 250 = 975$. $c = 5\sqrt{39}$.</p>
11	13		<p>The shadow of the flagpole 3000 miles north of the planet's equator forms a triangle with the shadow and the flagpole being its legs. Given that the approximately linear shadow has a length of $100\sqrt{3}$ ft and the flagpole has a length of 100 ft, the top angle of the triangle is defined by the inverse tangent function $\theta = \tan^{-1} \frac{100\sqrt{3}}{100} = 60^\circ$.</p> <p>Assuming that ray of light on the flagpole at 3000 miles north and the ray of light on the flagpole at the equator are parallel, the radial vector from the center of the planet to the flagpole at 3000 miles north of the equator is a transversal cutting two parallel light rays. The 60° angle is also the angle subtended by the 3000 mile arc of distance between the two cities referenced in this problem. Since 60° is $1/6$ of a circle, the circumference of the planet is 18,000 miles.</p>

14	14	<p>The solution is done by drawing a square with 180 minutes in both directions. Put Trung's arrival on one axis and Stacey's on the other. If Trung arrives at 0 (11am), Stacey must arrive by 11:10 or they miss. For every minute later that Trung arrives, Stacey can arrive a minute later.</p> <p>However, if Stacey arrives at 11am, Trung can arrive any time before noon, etc. This gives you a square with a "ribbon" in the middle that represents the arrival times where they meet. The probability of meeting is represented by the area of the shaded region as a fraction of the whole square.</p>  $P = \frac{180^2 - \left(\frac{1}{2} 170^2 + \frac{1}{2} 120^2\right)}{180^2} = \frac{10750}{32400} = \frac{215}{648}$
12	15	<p>The four grandparents all have the brown and blue eye alleles. Therefore, their children, if they are to have brown eyes, could have the following allele combinations: (Br,Bl), (Bl,Br) or (Br,Br). Let's assume that the four grandparents are the parents of a man-woman couple that have brown eyes according to the possible allele combinations given above. In order for the grandchild to have blue eyes, both of its parents must pass the blue eye gene to them. Both mother and father have a 2/6 chance of doing this since each gene has an equal chance of being passed on. For both to pass the blue-eye gene to their child, the probability is $2/6 \times 2/6 = 4/36 = 1/9$</p>
13		<p>Algebra Solution: The "average" radius is $(5+0)/2 = 5/2$, one revolution being 5π and five revolutions equals 25π meters.</p> <p>Calculus Solution: Since arc length is $s = r\theta$, the differential equation for small increments of arc is $ds = r d\theta$. We wish to sum up these differentials over 5 revolutions, 10π, where $r(\theta) = 5 - \theta/2\pi$. Therefore $s = \int_0^{10\pi} 5 - \frac{\theta}{2\pi} d\theta = 5\theta - \frac{\theta^2}{4\pi} = 25\pi$. Units of [meters] are optional.</p>
14		<p>$x^2 + y^2 = 24^2$. Implicitly differentiating we get $2x \frac{dx}{dt} + 2y \frac{dy}{dt} = 0$. When $\theta = \frac{\pi}{3}$, we get $x = 12$ and $y = 12\sqrt{3}$. Solving for dy/dt,</p> $12(3) + 12\sqrt{3} \frac{dy}{dt} = 0 \rightarrow \frac{dy}{dt} = -\frac{3}{\sqrt{3}} \text{ ft/sec.}$
15		<p>$P(\text{Cuddle}) = 1 - [P(0\text{of}5) + P(1\text{of}5)]$</p> $1 - \left[\binom{5}{5} 0.6^5 + \binom{5}{4} 0.6^4 0.4 \right] = \frac{3125 - 243 - 810}{3125} \approx 0.66$